

Time: 40 Minutes	Paper Math 3	Total Marks: 25
3rd Month, 3rd Week, 6th Day		Syllabus: Revision Test.

Q.1. Solve the following. (10) درج ذیل کو حل کریں۔

(i) $\frac{3}{7} + \frac{2}{7}$ (ii) $\frac{1}{8} + \frac{3}{8}$

(iii) $\frac{1}{6} + \frac{3}{6}$ (iv) $\frac{1}{9} + \frac{4}{9}$

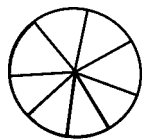
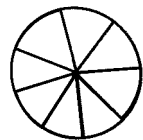
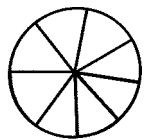
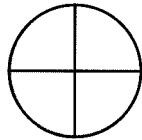
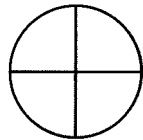
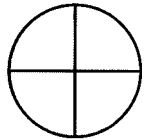
Q.2. Solve the following. (10) درج ذیل کو حل کریں۔

(i) $\frac{3}{7} - \frac{1}{7}$ (ii) $\frac{5}{6} - \frac{3}{6}$

(iii) $\frac{3}{5} - \frac{2}{5}$ (iv) $\frac{5}{11} - \frac{3}{11}$

Q.3. Write the fractions of the coloured parts and then solve. (5)

رنگ دار حصوں کے مطابق کسر لکھیں اور پھر حل کریں۔



Time: 40 Minutes	Paper Math 3	Total Marks: 25
3rd Month, 3rd Week, 6th Day		Syllabus: Revision Test.

Q.1. Solve the following. (10) درج ذیل کو حل کریں۔

(i) $\frac{3}{7} + \frac{2}{7}$ (ii) $\frac{1}{8} + \frac{3}{8}$

(iii) $\frac{1}{6} + \frac{3}{6}$ (iv) $\frac{1}{9} + \frac{4}{9}$

Q.2. Solve the following. (10) درج ذیل کو حل کریں۔

(i) $\frac{3}{7} - \frac{1}{7}$ (ii) $\frac{5}{6} - \frac{3}{6}$

(iii) $\frac{3}{5} - \frac{2}{5}$ (iv) $\frac{5}{11} - \frac{3}{11}$

Q.3. Write the fractions of the coloured parts and then solve. (5)

رنگ دار حصوں کے مطابق کسر لکھیں اور پھر حل کریں۔

